


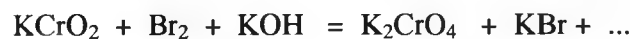

Домашнее задание (Группа 220401)

Составить уравнения ОВР методом электронно-ионного баланса


Билет 1



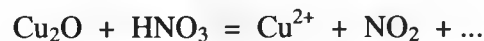
Билет 2



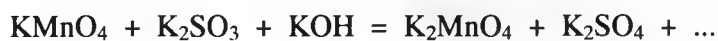
Билет 3



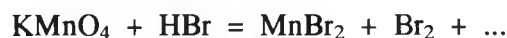
Билет 4



Билет 5



Билет 6



Билет 7



Билет 8

